

Úkol: Doplň čísla, která se ztratila z příkladů. Potom je spoj se správnou šipkou.

$$341 + \quad = 360$$

$$22$$

$$84 - \quad = 34$$

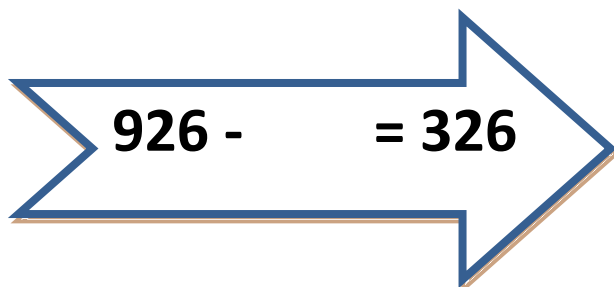
$$7$$


$$728 + \quad = 750$$

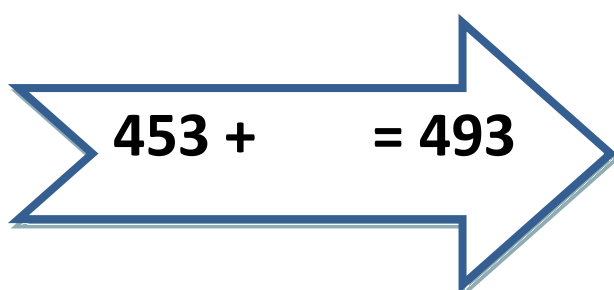
$$19$$

$$500 - \quad = 493$$

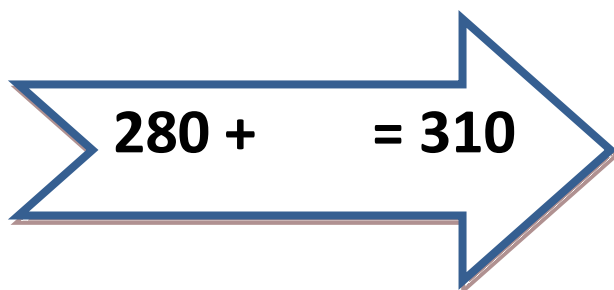
$$50$$


 $926 - = 326$

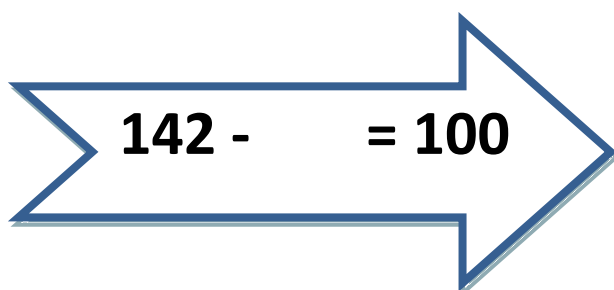
 30

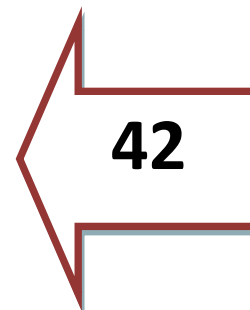
 $453 + = 493$

 600

 $280 + = 310$

 40

 $142 - = 100$

 42